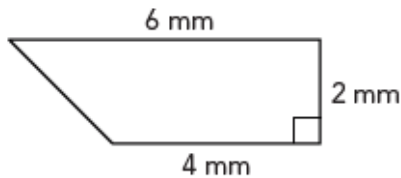
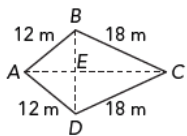


Calculate the area of the trapezoid.



Given $AC = 27$ inches and $BE = 6$ inches, find the area



Name the property of arithmetic used to rewrite the numeric statement.

$$(6 + 3) + 21 - 8 = 6 + (3 + 21) - 8$$

What are the common factors of 18 and 45?

What are the common multiples of 2 and 5 between 1 and 25?

least common multiple for the numbers 5 and 12.

greatest common factor for 28 and 42

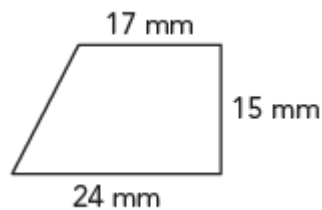
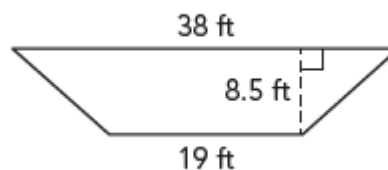
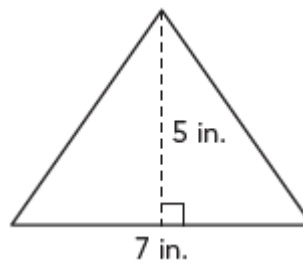
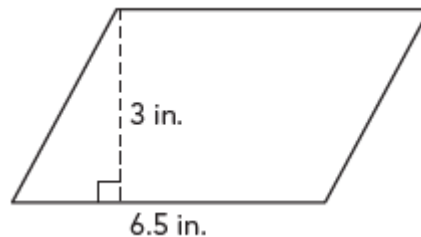
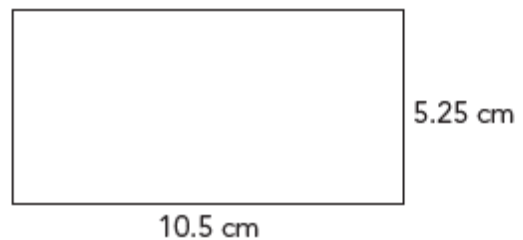
Use the Distributive Property to write and evaluate a numeric expression that models the area of the entire rectangle shown.



What are the common multiples of 3 and 11 between 1 and 100?

List the prime numbers between 1 – 30.

Calculate the area of each shape.



What are the common factors of 16 and 64?